

Sl.No.

**18 (E)**  
(MARCH, 2024)

**Time : 3 Hours]**

**[Maximum Marks : 80**

**Instructions :**

- 1) Write in a clear legible handwriting.
- 2) This question paper has four Sections A, B, C & D and Question Numbers from 1 to 54.
- 3) All Sections are compulsory. Internal options are given.
- 4) The numbers to the right represent the marks of the question.
- 5) Draw neat diagrams wherever necessary.
- 6) New sections should be written in a new page. Write the answers in numerical order.
- 7) Calculator, digital watch or smart watch is not allowed.

**SECTION - A**

- Answer the following as per instruction given (Questions : 1 to 24) (1 mark each). [24]
- Choose the correct option from the question given below (Questions : 1 to 6). (1 mark each).

- 1) For a given pair of linear equations in two variables, if  $\frac{a_1}{a_2} \neq \frac{b_1}{b_2}$  then equation has \_\_\_\_\_ solution. [1]
- (A) One (B) Two
- (C) Three (D) No solution

2) If the two roots of quadratic equation  $ax^2 + bx + c = 0$  ( $a \neq 0$ ) are real and equal then \_\_\_\_\_ [1]

(A)  $b^2 - 4ac < 0$

(B)  $b^2 - 4ac = 0$

(C)  $b^2 - 4ac > 0$

(D)  $b^2 - 4ac \neq 0$

3) For the AP : 4, 10, 16, 22, ..... common difference (d) is \_\_\_\_\_ [1]

(A) 8

(B) 5

(C) 6

(D) 12

4) The distance between the points (0, 5) and (-5, 0) is \_\_\_\_\_ [1]

(A) 5

(B)  $5\sqrt{2}$

(C)  $2\sqrt{5}$

(D) 10

5)  $\sec^2 \theta - \tan^2 \theta =$  \_\_\_\_\_ [1]

(A) 0

(B) 1

(C) -1

(D) 2

6) For any data  $\bar{X} = 25$  and  $Z = 25$  then  $M =$  \_\_\_\_\_ [1]

(A) 25

(B) -25

(C) 5

(D) -5

■ Fill in the blanks with correct option as to make the given statement correct : (Questions : 7 to 12). (1 mark each).

7)  $3 + 2\sqrt{5}$  is a/an \_\_\_\_\_ number. (rational, irrational, negative integer) [1]

8) The sum of zeroes of quadratic polynomial  $4x^2 - 3x - 7$  is \_\_\_\_\_  $\left(\frac{3}{4}, \frac{4}{3}, \frac{7}{3}\right)$  [1]

9) When a coin is tossed three times, the total number of possible outcomes is \_\_\_\_\_. (4, 6, 8) [1]

10)  $\tan \theta \cdot \cot \theta = \underline{\hspace{2cm}}$ . (-1, 0, 1) [1]

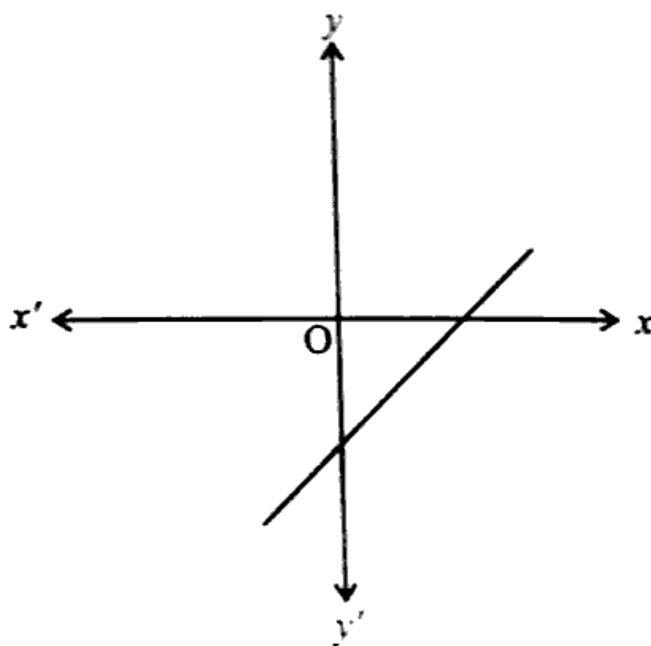
11) A circle can have          parallel tangents at the most. (1, 2, 3) [1]

12) Median of -2, -3, 0, 1, 3, 2, 7 is         . (-2, 1, 3) [1]

■ State True or False for statements given below : (Questions : 13 to 16). (1 mark each).

13) H.C.F. of 17, 23 and 29 is 1. [1]

14) Number of zeroes of  $y = p(x)$  is 2 from figure given below. [1]



15) If the pair of linear equations in two variables are  $2x + 3y = 12$  and  $3x + 2y = 18$  then  $x + y = 5$ . [1]

16) The probability of an impossible event is zero (0). [1]

- Answer the following in one sentence or one word or number (Questions 17 to 20). (1 mark each).

17)  $a, 2a, 3a, 4a, \dots$  is an Arithmetic Progression or not? [1]

18) How many tangents can be drawn to a circle passing through a point lying inside the circle? [1]

19) A die is thrown once. What is the probability of not getting number 6? [1]

20) Find the mean of First 11 Natural Numbers. [1]

- Match the pairs : (Questions : 21 to 24). (1 mark each). [4]

	A	B
21)	Base area of hemisphere	(a) $2\pi rh$
22)	Volume of a 5 rupee coin	(b) $\pi r^2$ (c) $\pi r^2 h$

	A	B
23)	Length of an arc of a sector of angle $\theta$	(a) $\pi d$
24)	Circumference of a circle	(b) $\pi r$ (c) $\frac{\pi r \theta}{180}$

**SECTION - B**

- Answer the following briefly with calculation : (Any 9) (Questions : 25 to 37)  
(2 marks each). [18]

25) Find the zeroes of the quadratic polynomial  $x^2 + 7x + 10$ . [2]

26) Find a quadratic polynomial whose sum and product of its zeroes are  $-\frac{1}{4}$  and  $\frac{1}{4}$  respectively. [2]

27) Find the roots of the quadratic equation  $x^2 - 3x - 10 = 0$  by factorisation method. [2]

28) Find the 10<sup>th</sup> term of the AP : 2, 7, 12, ... [2]

29) Find the sum of the first 1,000 positive integers. [2]

30) Find the distance between the points (2, 3) and (4, 1) using distance formula. [2]


31) Find the values of  $y$  for which the distance between the points P(2, -3) and Q(10,  $y$ ) is 10 units. [2]

32) If  $\sin \theta = \frac{4}{5}$ , calculate  $\cos \theta$  and  $\tan \theta$ . [2]

33) Evaluate : [2]

$$\sin 60^\circ \cos 30^\circ + \sin 30^\circ \cos 60^\circ$$

- 34) A tower stands vertically on the ground. From a point on the ground, which is 15 m away from the foot of the tower, the angle of elevation of the top of the tower is found to be  $60^\circ$ . Find the height of the tower. [2]
- 35) 2 cubes each of volume  $125 \text{ cm}^3$  are joined end to end. Find the volume of the resulting cuboid. [2]
- 36) A juice seller was serving his customers using glasses as shown in the figure. The inner diameter of the cylindrical glass was 5 cm, but the bottom of the glass had a hemispherical raised portion which reduced the capacity of the glass. If the height of a glass was 10 cm. Find the apparent capacity of the glass. (Use  $\pi = 3.14$ ). [2]



Figure

- 37) Find Median for the classical distribution data when  $n = 53$ ,  $l = 60$ ,  $cf = 22$ ,  $f = 7$  and  $h = 10$ . [2]

SECTION - C

- Answer the following questions any 6 from 38 to 46. (9 questions). (3 marks each). [18]

- 38) Solve the following pair of linear equations by the substitution method. [3]

$$2x + 3y = 11$$

$$2x - 4y = -24$$

- 39) Solve the following pair of linear equations by elimination method. [3]

$$3x - 5y - 4 = 0$$

$$9x = 2y + 7$$

- 40) Find the sum of the first 40 positive integers divisible by 7. [3]

- 41) Find the coordinates of a point A, where AB is the diameter of a circle whose centre is (2, -3) and B(1, 4). [3]

- 42) Find the coordinates of the points of trisection of the line segment joining (4, -1) and (-2, -3). <https://www.gujaratboardonline.com> [3]

- 43) Prove that "The lengths of tangents drawn from an external point to a circle are equal. [3]

- 44) Two concentric circles are of radii 41 cm and 40 cm. Find the length of the chord of the larger circle which touches the smaller circle. [3]

- 45) The following table shows the ages of the patients admitted in a hospital during a year: [3]

Age (in years)	5-15	15-25	25-35	35-45	45-55	55-65
Number of patients	6	11	21	23	14	5

Find the mode of the data given above.

- 46) A Piggy bank contains hundred 50 p coins, fifty ₹ 1 coins, twenty ₹ 2 coins and ten ₹ 5 coins. If it is equally likely that one of the coins will fall out when the bank is turned upside down, what is the probability that the coin : [3]
- Will be a 50 p coin?
  - Will not be a ₹ 5 coin?
  - Will be a ₹ 1 coin?

### SECTION - D

- Answer the following questions any 5 from 47 to 54 (8 Questions) with calculation : (4 marks each). [20]
- 47) State Basic proportionality theorem and prove it. [4]
- 48) A girl of height 90 cm is walking away from the base of a lamp-post at a speed of 1.2 m/s. If the lamp is 3.6 m above the ground, find the length of her shadow after 4 seconds. [4]
- 49) The altitude of a right triangle is 7 cm less than its base. If the hypotenuse is 13 cm, find the other two sides. [4]



50) A manufacturer of TV sets produced 600 sets in the third year and 700 sets in the seventh year. Assuming that the production increases uniformly by a fixed number every year, find : [4]

- i) the production in the 1<sup>st</sup> year.
- ii) the production in the 10<sup>th</sup> year.
- iii) the total production in first 7 years.

51) The table below shows the daily Expenditure on food of 25 households in a locality. [4]

Daily Expenditure (in ₹)	100-150	150-200	200-250	250-300	300-350
Number of Households	4	5	12	2	2

Find the mean daily Expenditure on food by a suitable method.

52) If the median of the distribution given below is 28.5, find the values of  $x$  and  $y$ . [4]

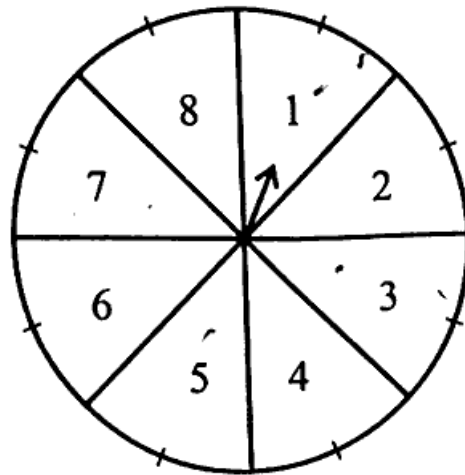
Class Interval	Frequency
0 - 10	5
10 - 20	$x$
20 - 30	20
30 - 40	15
40 - 50	$y$
50 - 60	5
Total	60

53) One card is drawn from a well-shuffled deck of 52 cards. Find the probability of getting : [4]

- i) A red face card.
- ii) The jack of hearts.
- iii) An ace of black colour
- iv) Not an ace

54) A game of chance consists of spinning an arrow which comes to rest pointing at one of the numbers 1, 2, 3, 4, 5, 6, 7, 8 (see the Figure) and these are equally likely outcomes. What is the probability that it will point at [4]

- i) 8?
- ii) an odd number?
- iii) a number greater than 2?
- iv) a number less than 9?



<https://www.gujaratboardonline.com>

Whatsapp @ 9300930012

Send your old paper & get 10/-

अपने पुराने पेपर्स भेजे और 10 रुपये पायें,

Paytm or Google Pay से